

Division Basics

(Addition, Subtraction, Multiplication)

Student's Name : _____

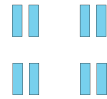
class : _____

Now, we will do some practice.



Answers

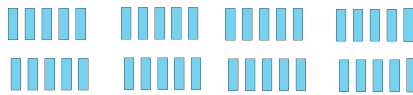
1. $8 \div 2 = \underline{4}$



2. $9 \div 3 = \underline{3}$



3. $40 \div 5 = \underline{8}$



4. $30 \div 6 = \underline{5}$



5. $21 \div 7 = \underline{3}$



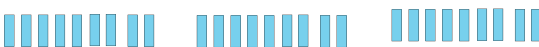
6. $14 \div 2 = \underline{7}$



7. $25 \div 5 = \underline{5}$




8. $27 \div 9 = \underline{3}$



9. $18 \div 9 = \underline{2}$



10. $24 \div 12 = \underline{2}$



11. $26 \div 13 = \underline{2}$



12. $32 \div 4 = \underline{8}$

