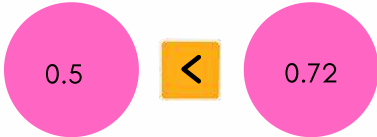


Comparing Fractions and Decimals


Problems

1 Use $>$ (greater than) and $<$ (less than) or $=$ (equal) to compare the fractions.

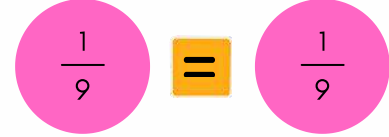
1.



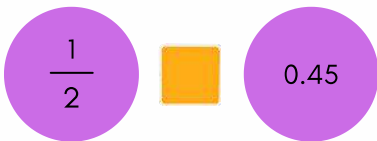
2.




3.




4.




5.



6.



7.




8.




9.




10.




11.




12.




13.



14.



15.



16.



17.



18.



19.



20.



21.

