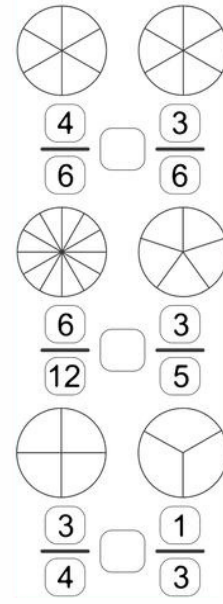
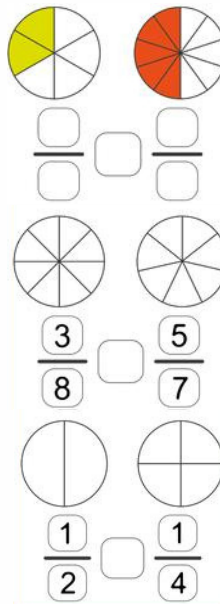
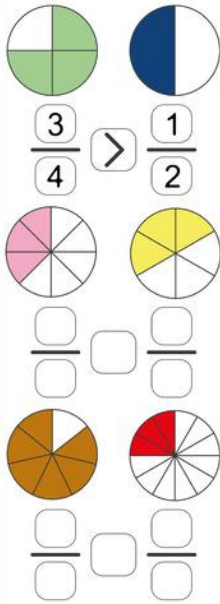


Comparing Fraction Practice

Problems


1

Compare following Fractions.



2


Draw the fraction and circle the greater one



$$\frac{1}{3}$$



$$\frac{3}{3}$$



$$\frac{4}{5}$$



$$\frac{5}{5}$$



$$\frac{2}{3}$$



$$\frac{1}{3}$$



$$\frac{2}{5}$$



$$\frac{3}{5}$$



$$\frac{2}{3}$$



$$\frac{3}{3}$$



$$\frac{4}{5}$$



$$\frac{1}{5}$$