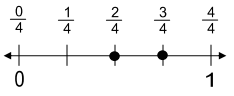
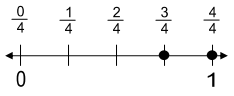
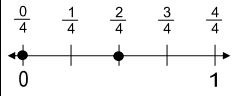
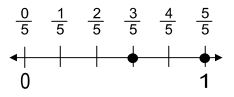
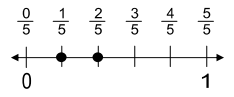
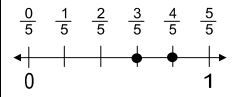


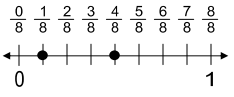
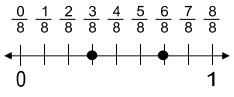
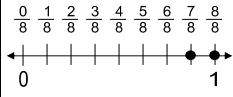
COMPARING FRACTIONS PRACTICE SHEET - A

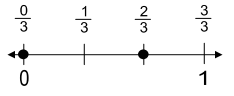
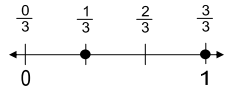
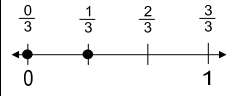
ANSWERS - PAGE 1

PLACE THE FRACTIONS ON THE NUMBER LINE AND CIRCLE THE BIGGER ONE.

 $\frac{2}{4}$ $\frac{3}{4}$	 $\frac{4}{4}$ $\frac{3}{4}$	 $\frac{0}{4}$ $\frac{2}{4}$
---	--	--

 $\frac{5}{5}$ $\frac{3}{5}$	 $\frac{2}{5}$ $\frac{1}{5}$	 $\frac{4}{5}$ $\frac{3}{5}$
---	--	--

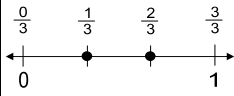
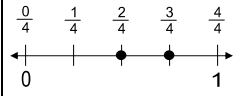
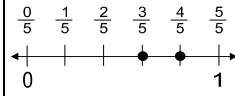
 $\frac{1}{8}$ $\frac{4}{8}$	 $\frac{3}{8}$ $\frac{6}{8}$	 $\frac{8}{8}$ $\frac{7}{8}$
---	--	--

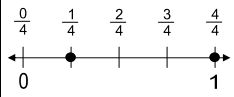
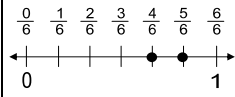
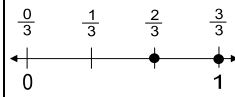
 $\frac{2}{3}$ $\frac{0}{3}$	 $\frac{1}{3}$ $\frac{3}{3}$	 $\frac{1}{3}$ $\frac{0}{3}$
---	--	--

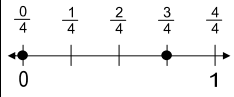
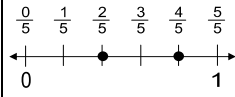
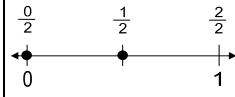
COMPARING FRACTIONS PRACTICE SHEET - C

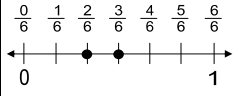
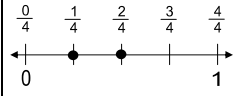
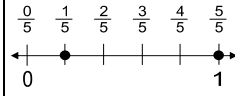
ANSWERS - PAGE 3

CREATE A NUMBER LINE AND CIRCLE THE GREATER FRACTION

 $\frac{1}{3}$ $\frac{2}{3}$	 $\frac{3}{4}$ $\frac{2}{4}$	 $\frac{3}{5}$ $\frac{4}{5}$
---	--	--

 $\frac{1}{4}$ $\frac{4}{4}$	 $\frac{4}{6}$ $\frac{5}{6}$	 $\frac{2}{3}$ $\frac{3}{3}$
---	--	--

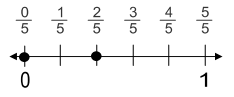
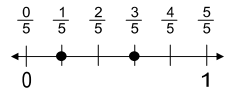
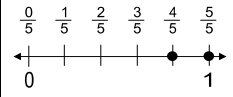
 $\frac{0}{4}$ $\frac{3}{4}$	 $\frac{4}{5}$ $\frac{2}{5}$	 $\frac{1}{2}$ $\frac{0}{2}$
---	--	--

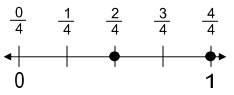
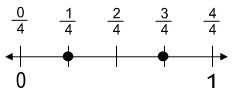
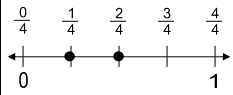
 $\frac{3}{6}$ $\frac{2}{6}$	 $\frac{1}{4}$ $\frac{2}{4}$	 $\frac{1}{5}$ $\frac{5}{5}$
---	--	--

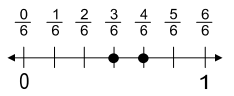
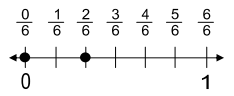
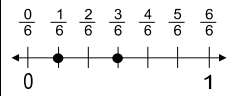
COMPARING FRACTIONS PRACTICE SHEET - B

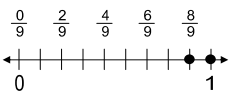
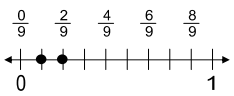
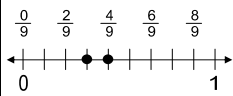
ANSWERS - PAGE 2

FILL IN THE NUMBER LINE AND CIRCLE THE LARGER FRACTION

 $\frac{2}{5}$ $\frac{0}{5}$	 $\frac{1}{5}$ $\frac{3}{5}$	 $\frac{4}{5}$ $\frac{5}{5}$
---	--	--

 $\frac{2}{4}$ $\frac{4}{4}$	 $\frac{1}{4}$ $\frac{3}{4}$	 $\frac{2}{4}$ $\frac{1}{4}$
---	--	--

 $\frac{4}{6}$ $\frac{3}{6}$	 $\frac{2}{6}$ $\frac{0}{6}$	 $\frac{3}{6}$ $\frac{1}{6}$
---	--	--

 $\frac{8}{9}$ $\frac{9}{9}$	 $\frac{2}{9}$ $\frac{1}{9}$	 $\frac{3}{9}$ $\frac{4}{9}$
---	--	--

ANSWERS FOR ALL 3 PAGES