

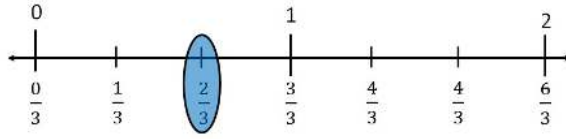
# Comparing Fraction Practice

## Problems

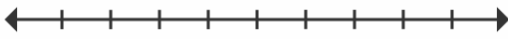
1 Fill in the number line and circle the greater Fraction one.

Example

$$\frac{1}{3} \quad \frac{2}{3}$$



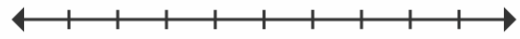
a)



$$\frac{4}{4}$$

$$\frac{3}{4}$$

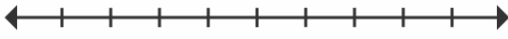
b)



$$\frac{0}{4}$$

$$\frac{2}{4}$$

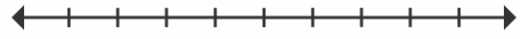
c)



$$\frac{2}{5}$$

$$\frac{1}{5}$$

d)



$$\frac{5}{5}$$

$$\frac{3}{5}$$

2 Create a number line and circle the greater Fraction


a)



$$\frac{2}{5}$$

$$\frac{3}{5}$$

b)



$$\frac{2}{5}$$

$$\frac{3}{5}$$

c)



$$\frac{4}{5}$$

$$\frac{1}{5}$$

d)



$$\frac{4}{5}$$

$$\frac{1}{5}$$