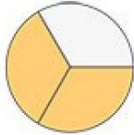


Fraction Practice

Problems

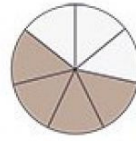
1 Write the fraction of each shape.



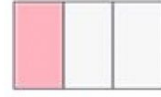
$\frac{2}{3}$



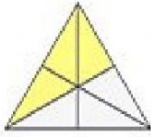
—



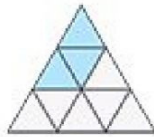
—



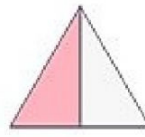
—




—



—



—



—

2 Write the missing part of pizza in fractions

PIZZA PARTY

The Bleacher Bobcats celebrated their championship with a pizza party! How much of a whole pizza did each player eat? Jot down the missing parts as fractions.

