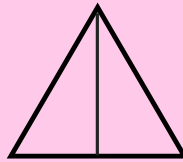
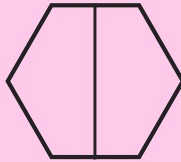



Equivalent Fractions

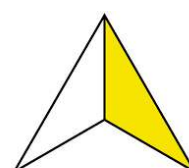
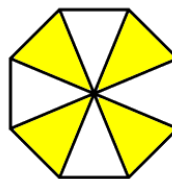
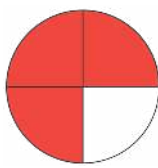
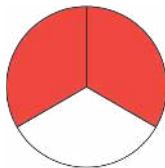
Assignment

Circle all the equivalent fractions in each group.

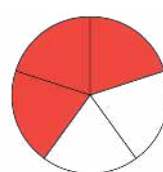
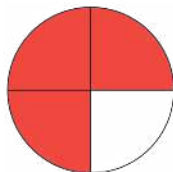
$$\frac{1}{2}$$



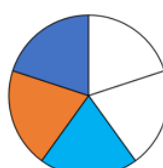
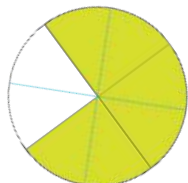
$$\frac{2}{3}$$



$$\frac{3}{4}$$



$$\frac{3}{5}$$



$$\frac{1}{4}$$

