

# Fraction and Number lines

## Assignment

On each number line place the fractions on correct place and label it.

1

$$\frac{12}{12}$$

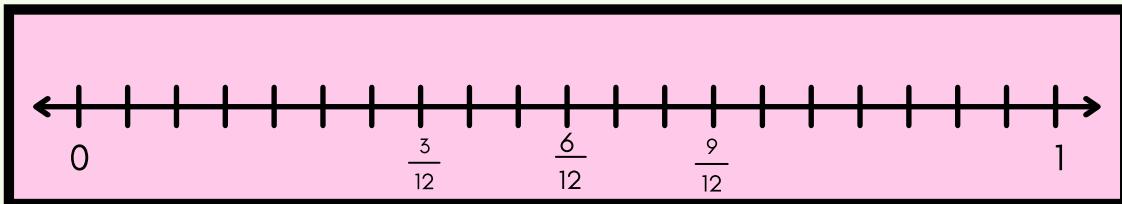
$$\frac{4}{12}$$

$$\frac{1}{12}$$

$$\frac{10}{12}$$

$$\frac{1}{2}$$

$$\frac{7}{12}$$



2

$$\frac{7}{8}$$

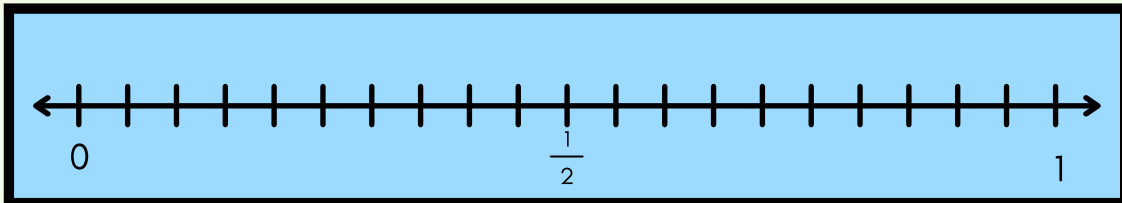
$$\frac{1}{4}$$

$$\frac{0}{2}$$

$$\frac{3}{6}$$

$$\frac{4}{4}$$

$$\frac{2}{12}$$



3

$$\frac{7}{24}$$

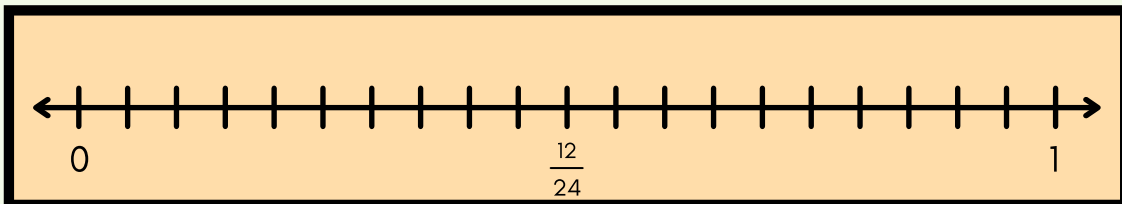
$$\frac{12}{12}$$

$$\frac{3}{24}$$

$$\frac{0}{24}$$

$$\frac{20}{24}$$

$$\frac{1}{2}$$



4

$$\frac{5}{6}$$

$$\frac{0}{6}$$

$$\frac{1}{2}$$

$$\frac{1}{6}$$

$$\frac{8}{8}$$

$$\frac{2}{6}$$

