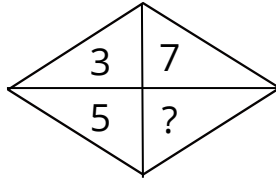
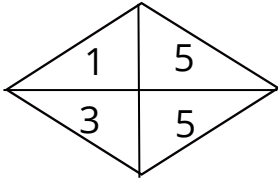
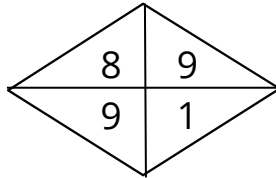
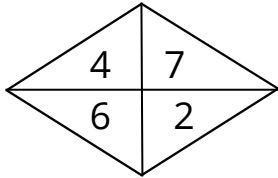


Numerical puzzles

Find the missing number:

1)



Answer:

2) Solve the puzzle:

$$2 + 10 = 24$$

$$3 + 6 = 27$$

$$7 + 2 = 63$$

$$5 + 3 = ?$$

Answer: