
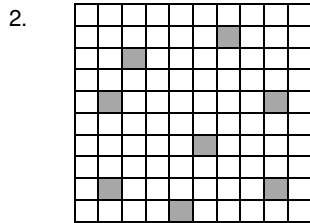



Write the decimal and percent for the shaded part.




0.43 and 43%




0.08 and 8%




0.52 and 52%




0.3 and 30%




0.02 and 2%



0.67 and 67%




0.24 and 24%



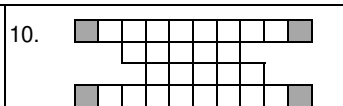
0.48 and 48%

Choose the best answer that shows what part is shaded. Use the letters for the picture.



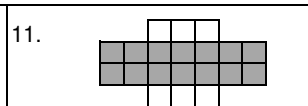
A 75%

A 75%, B 62%, C 70%



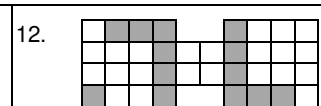
H 0.13

F 16%, G 20%, H 0.13



R 70%

R 70%, S 7%, T 0.07



Y 36%

X 0.34, Y 36%, Z 0.30

Find the percent of each Number. Round all answers to the nearest whole number.

13. 25% of 8

2

14. 81% of 19

15

15. 15% of 53.4

8

16. 27% of 121

33

17. 93% of 4.3

4