




# MONEY - USA CURRENCY


## ADDING and SUBTRACTING


# ANSWERS





 = \$0.75  
**FRENCH FRIES**

 = \$0.52  
**ICE CREAM**

 = \$0.44  
**MILK**













 = \$0.23  
**APPLE**

 = \$0.17  
**COOKIE**

 = \$0.58  
**CUP CAKE**

	
\$0.01	\$0.10
	
\$0.05	\$0.25

Use the pictures and prices to calculate how much money Alligator Jack will have left after each purchase.

ITEMS PURCHASED	MONEY IN HIS POCKET	AMOUNT LEFT
		<b>\$0.05</b>
		<b>\$0.18</b>
		<b>\$0.01</b>
		<b>\$0.29</b>
		<b>\$0.57</b>
		<b>\$0.06</b>