

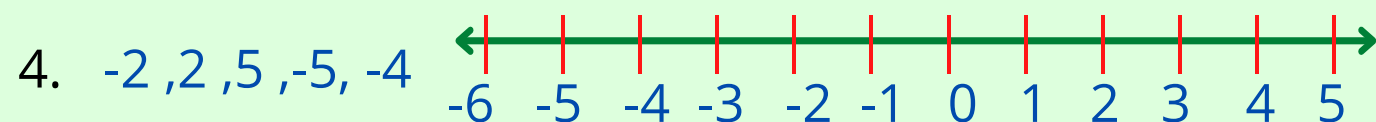
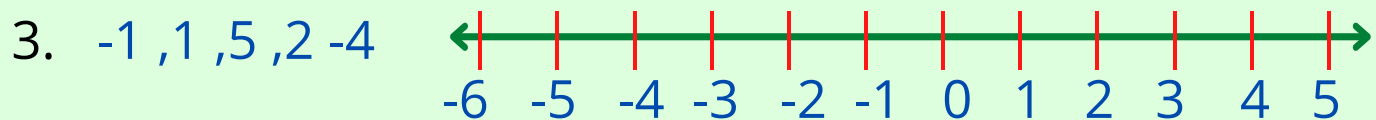
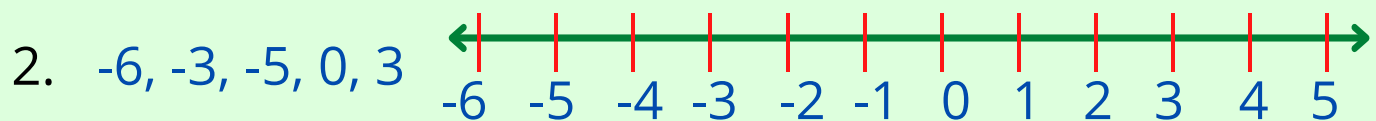
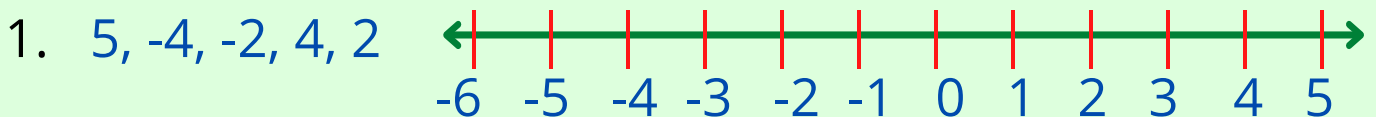
Name: _____ Date: _____

INTEGERS AND NUMBER LINES

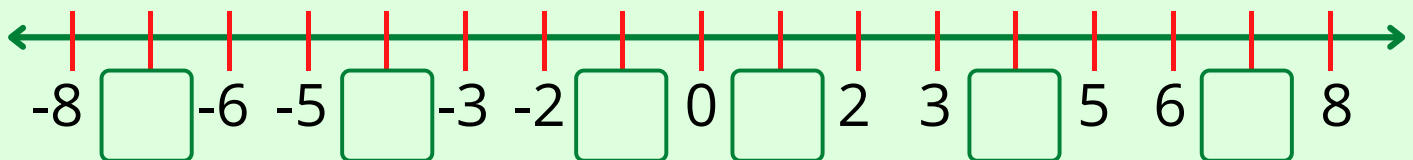
Use these symbols $<$, $>$, $=$ to make correct answer.

1. -5 5 2. -18 28 3. -10 10
4. -48 47 5. 54 -48 5. 45 54

Mark the integers on the number line.



Write the missing integers in box.



Answer the question using the above number line.

- ① 5 units to the left of 3 is _____ ② 3 units to the right of -2 is _____
③ 2 units to the left of -5 is _____ ④ 4 units to the right of 2 is _____