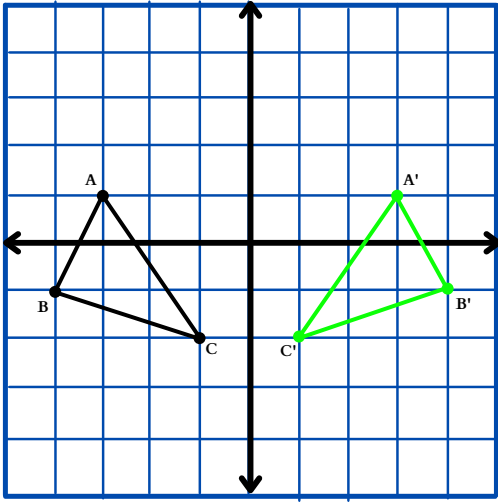


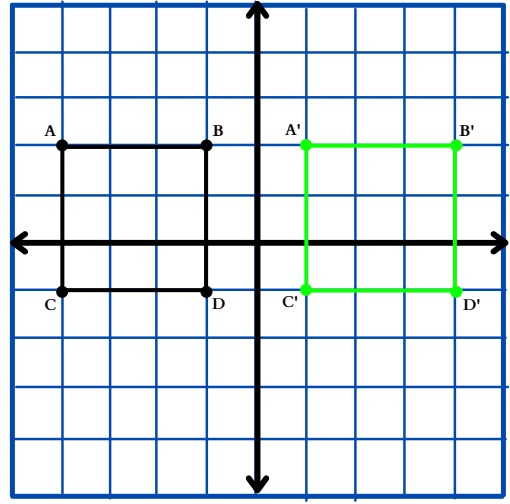
Check Your Answers

1.



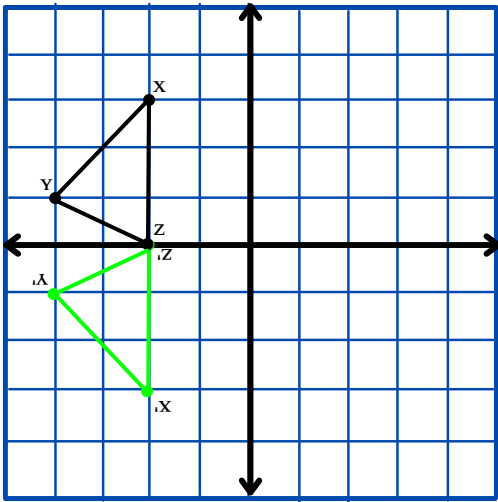
$$\begin{aligned} A(-3,1) &\longrightarrow A'(3,1) \\ B(-4,-1) &\longrightarrow B(4,-1) \\ C(-1,-2) &\longrightarrow C(1,-2) \end{aligned}$$

2.



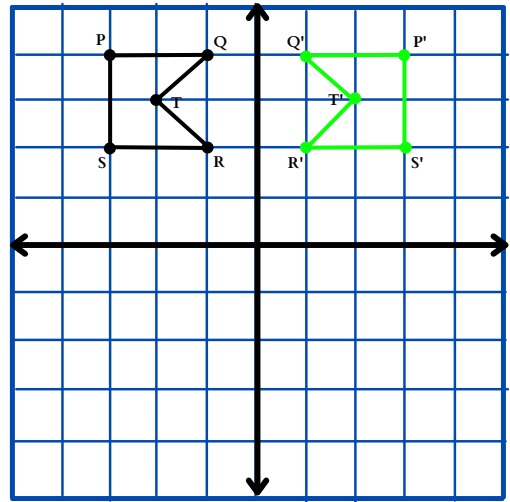
$$\begin{aligned} A(-1,2) &\longrightarrow A'(1,2) \\ B(-4,2) &\longrightarrow B'(4,2) \\ C(-1,-1) &\longrightarrow C'(1,-1) \\ D(-4,-1) &\longrightarrow D'(4,-1) \end{aligned}$$

3.



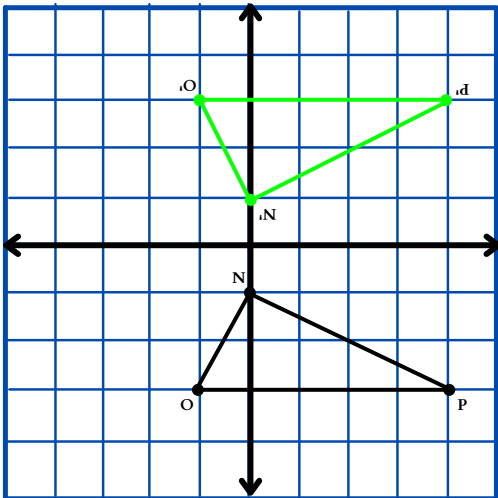
$$\begin{aligned} X(-2,3) &\longrightarrow X'(-2,-3) \\ Y(-4,1) &\longrightarrow Y'(-4,-1) \\ Z(0,2) &\longrightarrow Z'(0,-2) \end{aligned}$$

4.



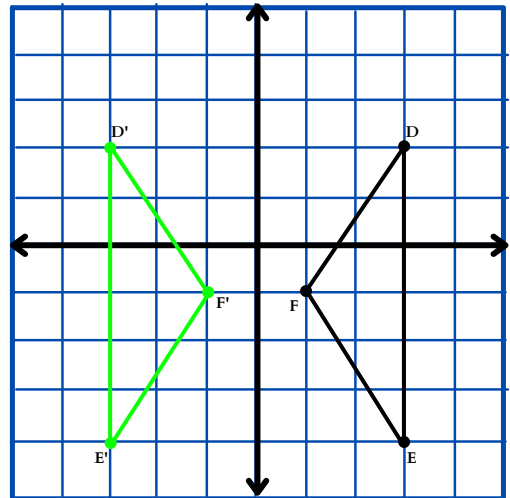
$$\begin{aligned} P(-3,4) &\longrightarrow P'(3,4) \\ Q(-1,4) &\longrightarrow Q'(1,4) \\ R(-1,2) &\longrightarrow R'(1,2) \\ S(-3,2) &\longrightarrow S'(3,2) \\ T(-2,3) &\longrightarrow T'(2,3) \end{aligned}$$

5.



$$\begin{aligned} N(0,-1) &\longrightarrow N'(0,1) \\ O(-1,-3) &\longrightarrow O'(-1,3) \\ P(4,-3) &\longrightarrow P'(4,3) \end{aligned}$$

6.



$$\begin{aligned} D(3,2) &\longrightarrow D'(-3,2) \\ E(3,-4) &\longrightarrow E'(-3,-4) \\ F(1,-1) &\longrightarrow F'(-1,-1) \end{aligned}$$