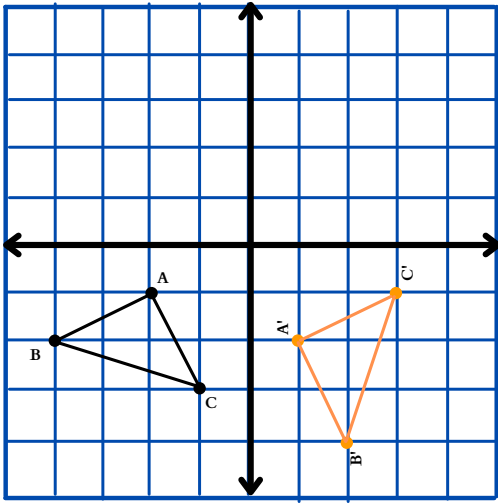


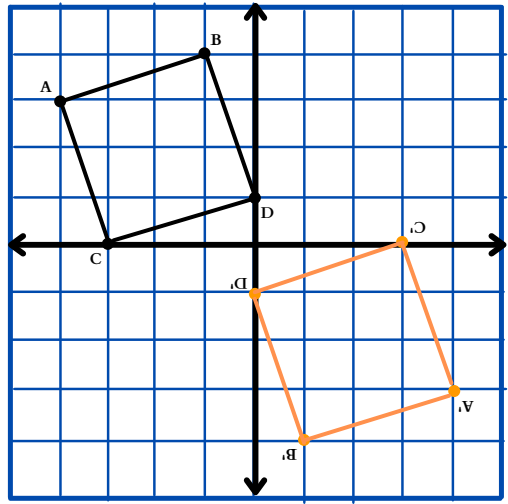
Check Your Answers

1.



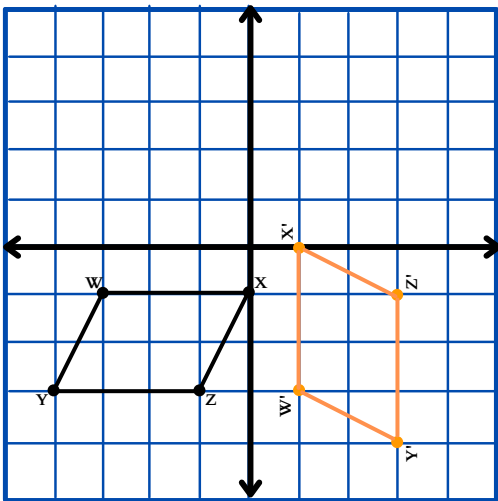
$$\begin{aligned} A(-2, -1) &\longrightarrow A'(1, -2) \\ B(-4, -2) &\longrightarrow B'(2, -4) \\ C(-1, -3) &\longrightarrow C'(3, -1) \end{aligned}$$

2.



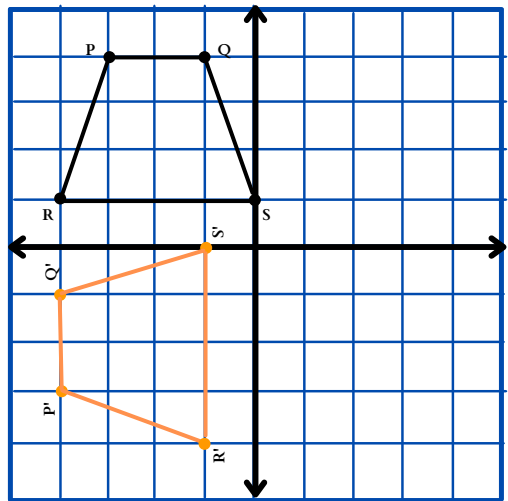
$$\begin{aligned} A(-4, 3) &\longrightarrow A'(4, -3) \\ B(-1, 4) &\longrightarrow B'(1, -4) \\ C(-3, 0) &\longrightarrow C'(3, 0) \\ D(0, 1) &\longrightarrow D'(0, -1) \end{aligned}$$

3.



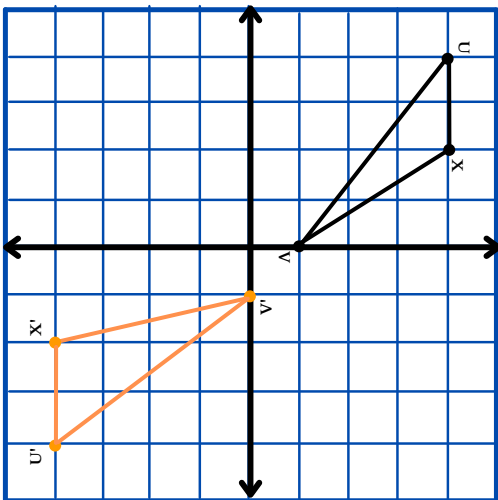
$$\begin{aligned} W(-3, -1) &\longrightarrow W'(-1, 3) \\ X(0, -1) &\longrightarrow X'(0, 1) \\ Y(-4, -3) &\longrightarrow Y'(3, -4) \\ Z(-1, -3) &\longrightarrow Z'(3, -1) \end{aligned}$$

4.



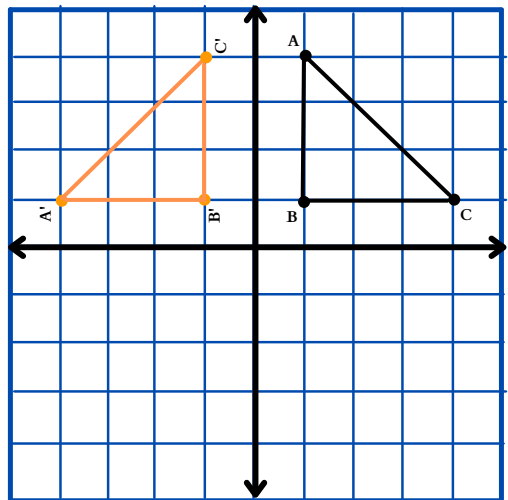
$$\begin{aligned} P(-3, 4) &\longrightarrow P'(-4, -3) \\ Q(-1, 4) &\longrightarrow Q'(-4, -1) \\ R(-4, 1) &\longrightarrow R'(-1, -4) \\ S(0, 1) &\longrightarrow S'(0, -1) \end{aligned}$$

5.



$$\begin{aligned} X(4, 2) &\longrightarrow X'(-4, -2) \\ U(4, 4) &\longrightarrow U'(-4, -4) \\ V(0, 1) &\longrightarrow V'(0, -1) \end{aligned}$$

6.



$$\begin{aligned} A(1, 4) &\longrightarrow A'(-4, 1) \\ B(1, 1) &\longrightarrow B'(-1, 1) \\ C(4, 1) &\longrightarrow C'(-1, 4) \end{aligned}$$