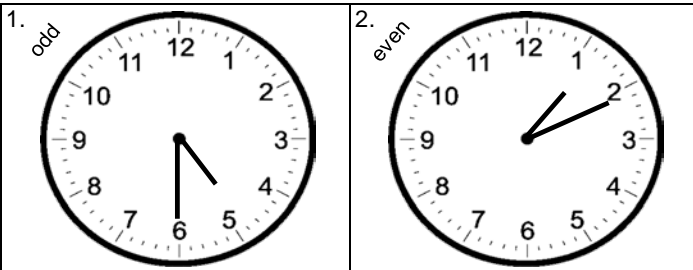


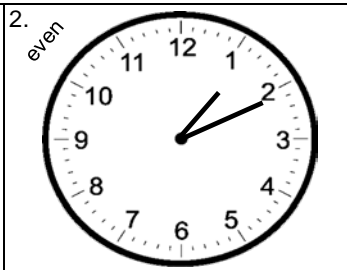
ANSWER, FIND, and SHADE
TIME REVIEW

ANSWERS


Shade the *even numbered problems* dark and the *odd numbered problems* light, or choose two different colors. Circle the correct time.




5:30 **4:30** 6:23




1:11 1:15 2:10



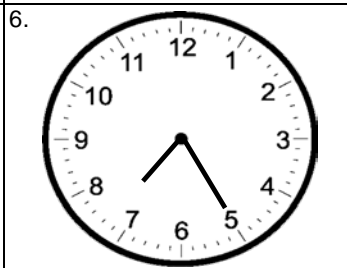
12:40 **11:39** 7:58



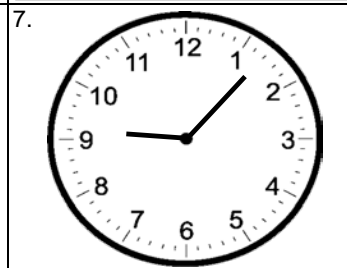
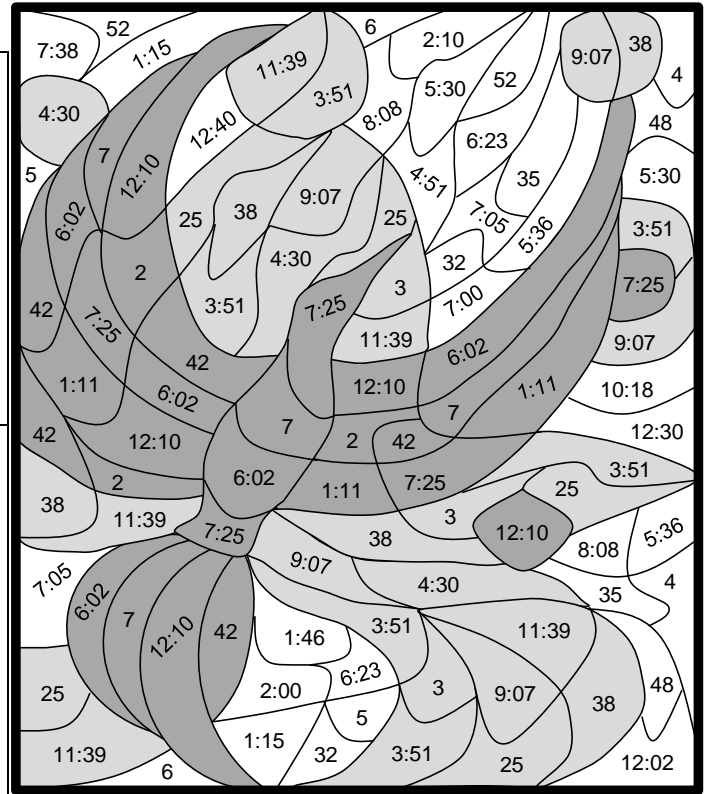
7:00 12:30 **6:02**




3:51 10:18 4:51



5:36 **7:25** 7:05



9:07 8:08 1:46



2:00 12:02 **12:10**

Write how many minutes have elapsed.

9. Start: 3:17 P.M.
End: 3:42 P.M.
25 minutes

10. Start: 10:43 A.M.
End: 11:25 A.M.
42 minutes

11. Start: 11:36 P.M.
End: 12:14 A.M.
38 minutes

Answer the word problems.

12. Jerry left his house at 8:45 A.M. and returned at 3:30 P.M. About how many hours was he gone?
7 hours

13. Stephanie arrived at the beach at 11:20 A.M. and went home at 2:45 P.M. Approximately, how many hours was she at the beach? **3 hours**

14. Yolo takes her dog for a 15 minute walk every morning at 7:20. About how many hours does she spend walking her dog each week? **2 hours**