

Mean, Median, Mode, and Range


Find the Mean for each set and color the objects.

1) 3, 9, 5, 2, 5, 7, 4

2) 50, 100, 25, 25


3) 6, 5, 10, 9, 8, 4

4) 5, 6, 8, 10, 12, 15, 9, 7




Find the Median for each set and color the objects.

1) 45, 74, 51, 84, 22



2) 14, 13, 21, 9, 4, 3



3) 4, 3, 8, 7, 2, 1, 9


4) 24, 27, 54, 24, 96, 45, 52

Find the Mode for each set and color the objects.

1) 2, 1, 5, 4, 2, 3, 1, 4,



2) 3, 5, 3, 0, 1, 3,



3) 44, 45, 43, 44, 41

4) 7, 5, 7, 1, 0, 7, 0

Find the Range for each set and color the objects.

1) 5, 6, 8, 7, 2, 9, 12

2) 18, 14, 23, 9, 6, 13

3) 4, 18, 54, 94, 25, 14

4) 9, 5, 45, 7, 6, 5

